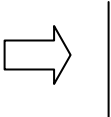
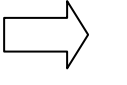



Math for Today Journal

Week 5

NO.2.3.3; A.5.3.2; G.9.3.2; M.13.3.6; DAP.17.3.2

<p>Bob has 4 bags of apples with 3 apples in each bag. How many apples does Bob have? Write a multiplication equation and solve.</p>	<p>Which of the following number sentences is true? A. $43 > 343$ B. $265 < 263$ C. $403 > 4,003$ D. $224 < 254$</p>	<p>Draw an example of a slide for the figure below.</p> 	<p>Claudia bought a basketball for \$8.95. She gave the cashier \$10.00. How much change did she receive?</p>				
<p>Predict what number will be rolled the most and record. Now roll the number cube 25 times. Record the results after each roll. Collect data on a frequency table and determine the number rolled the most. How did it compare to your prediction?</p>	<p>There are six children in the room. Each child has 2 shoes. How many shoes are there? Write a multiplication equation and solve.</p>	<p>Use the appropriate symbol to make this true.</p> <p>3,142 <input type="checkbox"/> 3,241</p>	<p>Draw an example of a flip for the figure below.</p> 				
<p>Brian buys two pieces of candy. Each piece of candy costs one dollar and twelve cents. If he gives the cashier a ten dollar bill, what will his change be?</p>	<p>Predict heads or tails for the most tossed and record. Toss a coin 30 times. Record the results of each throw in a frequency table. What was the result of your experiment? Was your prediction correct?</p>	<p>Each hamburger costs \$3 at the concession stand. If Stacy buys 4 hamburgers, how much will she spend? Write a multiplication equation and solve.</p>	<p>Use the appropriate symbol to make this true.</p> <p>654 <input type="radio"/> 564</p>				
<p>Draw an example of a turn for the figure below.</p> 	<table border="1" style="width: 100%; height: 100%;"> <tr> <td style="text-align: center; vertical-align: middle;"> <p>Draw.</p> <p style="font-size: 2em;">2</p> </td> <td style="text-align: center; vertical-align: middle;"> <input type="checkbox"/> Flip </td> </tr> <tr> <td style="text-align: center; vertical-align: middle;"> <input type="checkbox"/> slide </td> <td style="text-align: center; vertical-align: middle;"> <input type="checkbox"/> turn </td> </tr> </table>	<p>Draw.</p> <p style="font-size: 2em;">2</p>	<input type="checkbox"/> Flip	<input type="checkbox"/> slide	<input type="checkbox"/> turn	<p>Michele bought an order of fries for \$1.00, a hamburger for \$2.50 and a cola for \$1.10. She gave the clerk \$10.00. What is the fewest number of bills and coins she could have received in change?</p>	<p>Predict the color you think will be spun the most and record. Now spin your spinner 25 times and record the results after each spin. What was the result of your experiment? Was your prediction correct?</p>
<p>Draw.</p> <p style="font-size: 2em;">2</p>	<input type="checkbox"/> Flip						
<input type="checkbox"/> slide	<input type="checkbox"/> turn						

