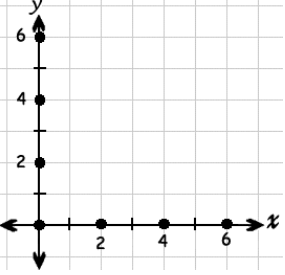

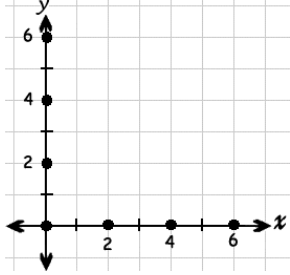

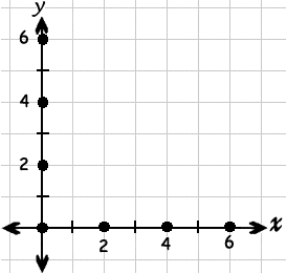



# Math for Today Journal

## Week 6

NO.2.3.4; A.6.3.1; G.10.3.1; M.13.3.7;DAP.17.3.3

<p>Write an equation and solve the following problem. Susie bought 7 candy bars. She spent a total of \$21. If each candy bar cost the same amount, how much did each candy bar cost?</p>	<p>Complete the table below.</p> <table border="1" data-bbox="506 499 794 730"> <thead> <tr> <th>Students</th> <th># of eyes</th> </tr> </thead> <tbody> <tr> <td>1</td> <td>2</td> </tr> <tr> <td>2</td> <td>4</td> </tr> <tr> <td>3</td> <td></td> </tr> <tr> <td>4</td> <td></td> </tr> </tbody> </table>	Students	# of eyes	1	2	2	4	3		4		<p>Plot a point at (3,4).</p> 	<p>Record the temperature on the thermometer below.</p> 
Students	# of eyes												
1	2												
2	4												
3													
4													
<p>Julie has 3 colors of blouses: red, blue, and green. She has khaki pants and jeans. How many combinations can she make? Show your work.</p>	<p>Write an equation and solve the following problem. Circus tickets cost \$5 each. How many tickets can you buy with \$35?</p>	<p>Complete the table below.</p> <table border="1" data-bbox="823 842 1110 1037"> <thead> <tr> <th>Tricycles</th> <th># of wheels</th> </tr> </thead> <tbody> <tr> <td>1</td> <td>3</td> </tr> <tr> <td>2</td> <td></td> </tr> <tr> <td>3</td> <td></td> </tr> </tbody> </table>	Tricycles	# of wheels	1	3	2		3		<p>Plot a point at (5,0).</p> 		
Tricycles	# of wheels												
1	3												
2													
3													
<p>Record the temperature.</p> 	<p>Sam is eating at Subway. How many combinations can he make if he has a choice between white, wheat and parmesan bread, ham, turkey, or salami, and Swiss, American, or cheddar cheese? ( He can only have one of each.)</p>	<p>Write an equation and solve the following problem. Mary bought 5 gumballs. She spent a total of 30 cents. How much did each gumball cost?</p>	<p>Complete the table below.</p> <table border="1" data-bbox="1140 1201 1430 1432"> <thead> <tr> <th>Hours</th> <th>Miles per Hour</th> </tr> </thead> <tbody> <tr> <td>1</td> <td>60</td> </tr> <tr> <td>3</td> <td>180</td> </tr> <tr> <td>4</td> <td></td> </tr> </tbody> </table>	Hours	Miles per Hour	1	60	3	180	4			
Hours	Miles per Hour												
1	60												
3	180												
4													
<p>Plot a point at (1, 4).</p> 	<p>Record the temp. in C.</p> 	<p>Emily is making an ice cream sundae. She can choose one ice cream flavor, one sauce, and one topping. How many combinations does she have to choose from? (Vanilla, chocolate, strawberry)( hot fudge and caramel) ( nuts and sprinkles)</p>	<p>Write an equation and solve the following problem. Hayden has toy cars. There are 2 cars on each track. All together there are 8 cars. How many tracks does he have?</p>										

--	--	--	--